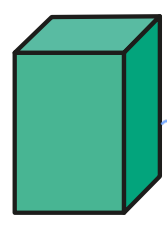
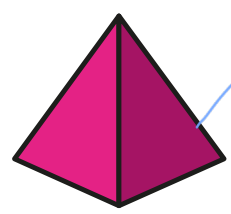

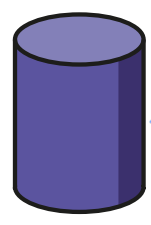
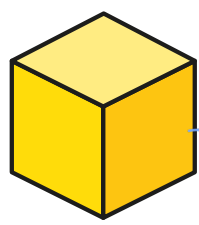
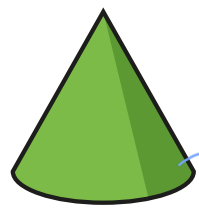


Recognise and name 3-D shapes

I Match each shape to its name.



sphere

cone

cuboid

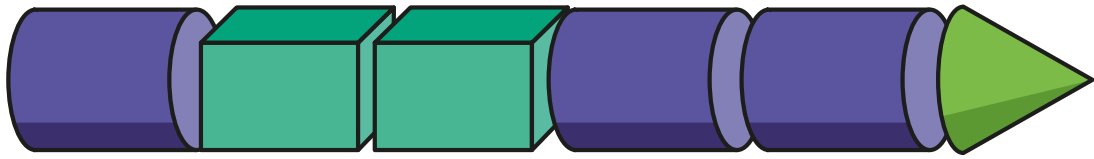
pyramid

cylinder

cube



2 a) Make this train.



Complete the sentences.

The train has cylinders.

The train has 2 cuboids.

The last shape in the train is a cone.

b) Make a train with these shapes.

- 3 cubes
- 2 spheres
- 1 cone

Is your train the same as your partner's?
What is the same and what is different?

c) Make a train with shapes in this order.

- 1st: sphere
- 2nd: cuboid
- 3rd: cuboid
- 4th: cylinder
- 5th: pyramid

